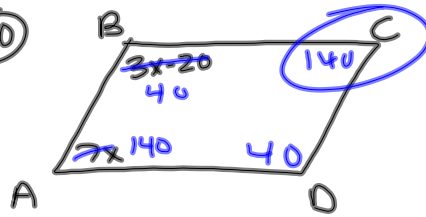


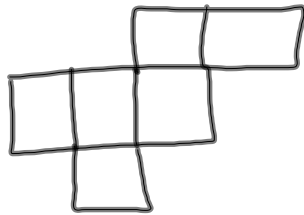
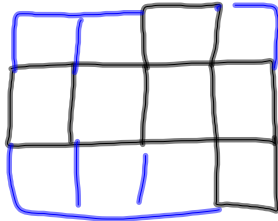
4-10-14
5th Geo

QA


(10)



$$\begin{aligned} 7x+3x-20 &= 180 \\ 10x-20 &= 180 \\ x &= 20 \end{aligned}$$



Line Symmetry

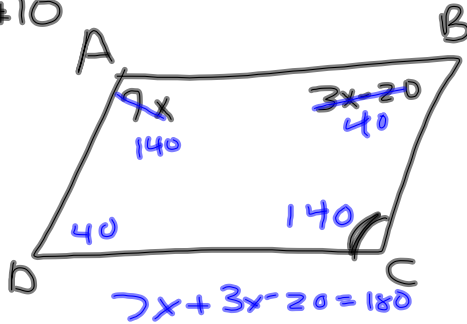


Which letters have both
horizontal and vertical
lines of symmetry?

H X I O

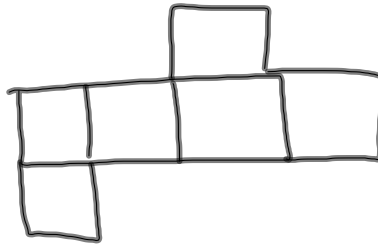
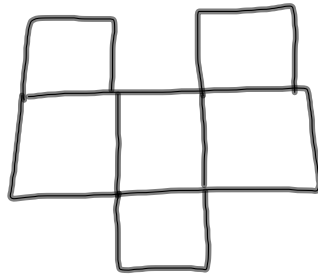
4-10-14
6th Geo

RQ
#10



$x = 20$

140



Symmetry

